





Name _____





Date _____

Subtraction





How many oranges are in the set? How many taken away (crossed-out)? How many are left? Write the answer down.





$$\begin{array}{r} 4 \\ - 1 \\ \hline \\ \hline \end{array}$$







$$\begin{array}{r} 4 \\ - 3 \\ \hline \\ \hline \end{array}$$







$$\begin{array}{r} 4 \\ - 2 \\ \hline \\ \hline \end{array}$$







$$\begin{array}{r} 4 \\ - 0 \\ \hline \\ \hline \end{array}$$







$$\begin{array}{r} 6 \\ - 2 \\ \hline \\ \hline \end{array}$$









$$\begin{array}{r} 6 \\ - 4 \\ \hline \\ \hline \end{array}$$









$$\begin{array}{r} 6 \\ - 3 \\ \hline \\ \hline \end{array}$$









$$\begin{array}{r} 6 \\ - 1 \\ \hline \\ \hline \end{array}$$









$$\begin{array}{r} 8 \\ - 3 \\ \hline \\ \hline \end{array}$$

$$\begin{array}{r} 8 \\ - 2 \\ \hline \\ \hline \end{array}$$

$$\begin{array}{r} 8 \\ - 1 \\ \hline \\ \hline \end{array}$$

$$\begin{array}{r} 8 \\ - 0 \\ \hline \\ \hline \end{array}$$